



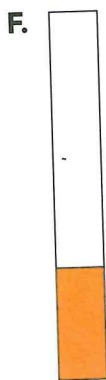


24. **Multiple Choice** Which gauge shows about 37 out of 120 cups remaining?



25. **Multiple Choice** Which gauge shows about 10 out of 120 cups remaining?



26. In Exercises 24 and 25, about what fraction is shaded in each gauge you chose?
27. For parts (a)–(c), sketch the gauge and, for each dispenser, say whether it can be best described as *almost empty*, *about half full*, or *almost full*.
- five sixths ( $\frac{5}{6}$ ) of a full dispenser
  - three twelfths ( $\frac{3}{12}$ ) of a full dispenser
  - five eighths ( $\frac{5}{8}$ ) of a full dispenser
28. If a class collects \$155 toward a fundraising goal of \$775, what fraction represents their progress toward their goal?